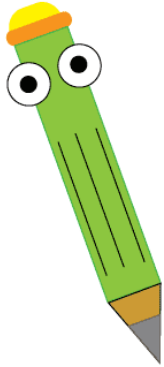


# Grade 1

# Comparing Numbers

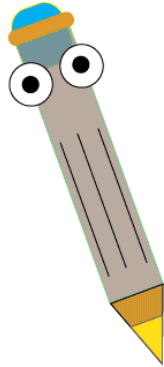
Name: \_\_\_\_\_ Class: \_\_\_\_\_

Circle the greatest number



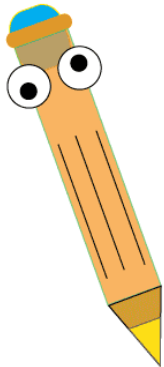
23      91  
35      19  
78  
82      66

Circle the number that equals  $100 - 53$



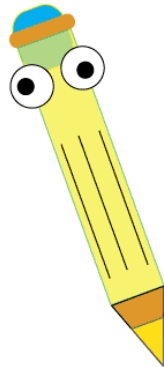
47      21  
92      11  
28  
44      53

Circle the 3 smallest numbers



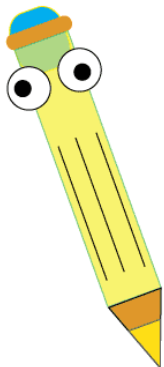
25      88  
22      65  
27  
48      91

Circle the two numbers with spelling errors.



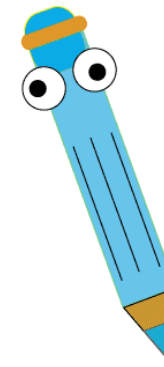
telve      fifty-five  
fourteen      sixty  
thirteen      eighty  
fourty-two

Circle the number that equals 30



100-12      98-5  
15 + 15      13 + 18  
100-30      27 - 11  
52 - 12

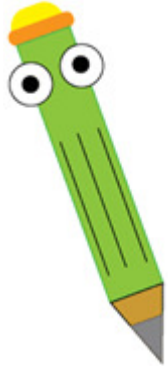
Circle the 2 greatest numbers



12      19  
77      55  
10      85  
52

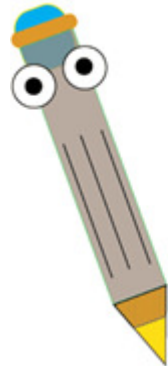
# Answers

Circle the greatest number



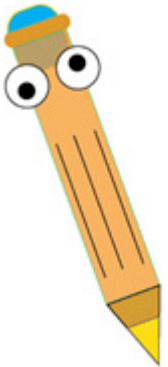
23	91
35	19
78	
82	66

Circle the number that equals  $100 - 53$



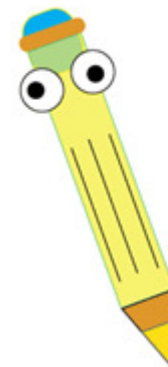
47	21
92	11
28	
44	53

Circle the 3 smallest numbers



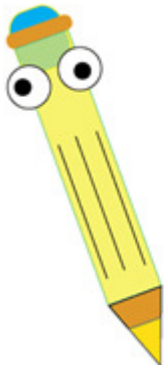
25	88
22	65
27	91
48	

Circle the two numbers with spelling errors.




telve	fifty-five
fourteen	sixty
thirteen	eighty
fourty-two	

Circle the number that equals 30



100-12	98-5
15 + 15	13 + 18
100-30	27 - 11
52 - 12	

Circle the 2 greatest numbers



12	19
77	55
10	85
52	